

ACCESO A 3º G. E.
LECTURA RÍTMICA

A musical score for rhythmic reading, consisting of four staves of music in 3/4 time. The key signature has one flat (B-flat). The score includes various rhythmic patterns, slurs, and articulation marks. The first staff starts with a treble clef and a 3/4 time signature. The second staff is marked with a '6' at the beginning. The third staff is marked with an '11' at the beginning. The fourth staff is marked with a '22' at the beginning. The score includes a key signature change to 3/8 time in the second staff. The music features eighth and sixteenth notes, rests, and slurs. There are also some triplets and pairs of notes indicated by the numbers 3 and 2 above the notes.

Andante

The first system of the musical score consists of three staves. The top staff is a single treble clef line in 3/4 time with a key signature of one flat (Bb). It begins with a whole rest, followed by a melodic line starting on G4, moving through A4, Bb4, C5, D5, E5, F5, G5, A5, Bb5, C6, D6, E6, F6, G6, and ending on A5. A dynamic marking of *mf* is placed below the first measure. The middle and bottom staves are grand staff accompaniment. The middle staff (treble clef) has a key signature of one flat and a 3/4 time signature. It contains block chords: G4-Bb4, G4-Bb4-C5, G4-Bb4-C5, G4-Bb4-C5, G4-Bb4-C5, G4-Bb4-C5, G4-Bb4-C5, and G4-Bb4-C5. The bottom staff (bass clef) has a key signature of one flat and a 3/4 time signature. It contains half notes: G3, G3, A3, A3, Bb3, Bb3, C4, and C4.

The second system of the musical score consists of three staves. The top staff continues the melodic line from the first system, starting on G5 and moving through A5, Bb5, C6, D6, E6, F6, G6, A6, Bb6, C7, D7, E7, F7, G7, and ending on A6. The middle and bottom staves continue the accompaniment. The middle staff has block chords: G4-Bb4, G4-Bb4-C5, G4-Bb4-C5, G4-Bb4-C5, G4-Bb4-C5, G4-Bb4-C5, G4-Bb4-C5, and G4-Bb4-C5. The bottom staff has half notes: G3, G3, A3, A3, Bb3, Bb3, C4, and C4.

The third system of the musical score consists of three staves. The top staff continues the melodic line, starting on G6 and moving through A6, Bb6, C7, D7, E7, F7, G7, A7, Bb7, C8, D8, E8, F8, G8, and ending on A7. A dynamic marking of *rit.* is placed below the middle staff at measure 18. The middle and bottom staves continue the accompaniment. The middle staff has block chords: G4-Bb4, G4-Bb4-C5, G4-Bb4-C5, G4-Bb4-C5, G4-Bb4-C5, G4-Bb4-C5, G4-Bb4-C5, and G4-Bb4-C5. The bottom staff has half notes: G3, G3, A3, A3, Bb3, Bb3, C4, and C4.

SETEMBRO 2014

NOMBRE

Acceso a 3º G. E.

1. Clasifica los siguientes intervallos.

Two musical staves in treble clef. The first staff contains four intervals: G4 to A4, C#4 to D#4, Bb3 to D4, and E3 to G4. The second staff, starting with a '5' above the first measure, contains four intervals: G4 to Bb4, C#4 to E4, F4 to A4, and C#4 to E4.

2. Construye intervallos ASCENDENTES.

Two musical staves in treble clef. The first staff has five intervals with labels below: G4 to A4 (2ª M), C4 to E4 (3ª m), G4 to E4 (8ª d), C#4 to E4 (3ª d), and G4 to D4 (6ª m). The second staff, starting with a '6' above the first measure, has five intervals with labels below: G4 to E4 (7ª M), C4 to G4 (5ª J), C#4 to E4 (2ª M), G4 to B4 (4ª d), and G4 to A4 (3ª A).

3. Dibuja la armadura e indica la tonalidad

A musical staff in treble clef with four empty boxes below it. Above each box is a key signature label: 1 b, 4 b, 3 b, and 6#.

A musical staff in treble clef with four empty boxes below it. Above each box is a key signature label: 0 #, 2 #, 5 #, and 1 #.

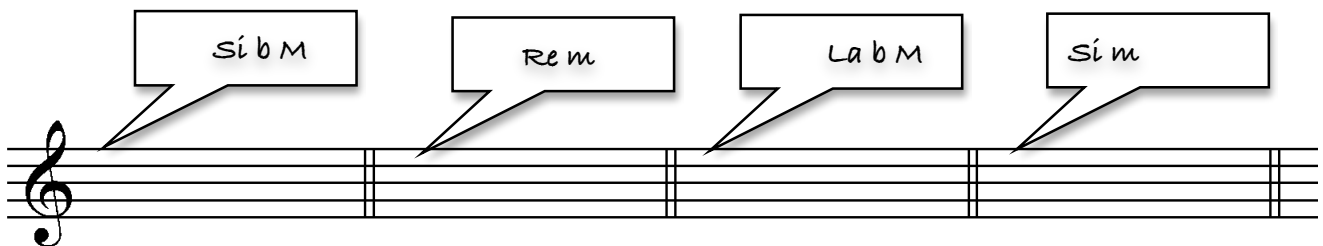
4.

Indica en qué tonalidad están las siguientes melodías.

Haydn



5. Dibuja la armadura de las siguientes tonalidades.



6. Escribe la clave y la armadura de las siguientes melodías:

Fa Mayor



Re Mayor

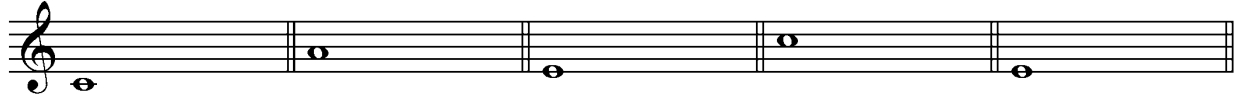


Acceso a 3º G. E.


PRUEBA AUDITIVA

NOMBRE

1. Escribe la segunda nota e indica el número del intervalo que forman.



2. Coloca la alteración (si hace falta) e indica si lo que escuchas es tono o semitono.



3. Escucha las siguientes melodías. Escribe en qué compás están y si están en modo Mayor o menor.





a) Compás: Modo:

b) Compás: Modo:

4. Coloca el ritmo a las siguientes notas



5. Dictado rítmico-melódico

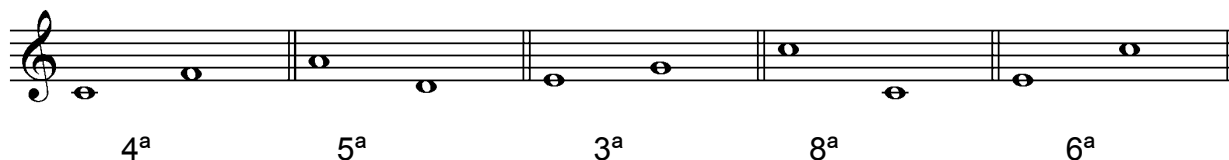


Acceso a 3º G. E.

PRUEBA AUDITIVA


NOMBRE

1. Escribe la segunda nota e indica el número del intervalo que forman.



4ª 5ª 3ª 8ª 6ª

2. Coloca la alteración (si hace falta) e indica si lo que escuchas es tono o semitono.



S S S T T

3. Escucha las siguientes melodías. Escribe en qué compás están y si están en modo Mayor o menor.

a) Compás: 2/4 Modo: menor

b) Compás: 6/8 Modo: mayor

4. Coloca el ritmo a las siguientes notas



7

5. Dictado rítmico – melódico.

